








Week 3 Prompt

<p>How does sound travel from the source to the receiver?</p>	<p>Date: _____ Temperature: _____ Daylight Hours: _____</p>	<p>Phase of the Moon </p>
<p>How does sound travel from the source to the receiver?</p>	<p>Date: _____ Temperature: _____ Daylight Hours: _____</p>	<p>Phase of the Moon </p>
<p>How does sound travel from the source to the receiver?</p>	<p>Date: _____ Temperature: _____ Daylight Hours: _____</p>	<p>Phase of the Moon </p>
<p>How does sound travel from the source to the receiver?</p>	<p>Date: _____ Temperature: _____ Daylight Hours: _____</p>	<p>Phase of the Moon </p>
<p>How does sound travel from the source to the receiver?</p>	<p>Date: _____ Temperature: _____ Daylight Hours: _____</p>	<p>Phase of the Moon </p>
<p>How does sound travel from the source to the receiver?</p>	<p>Date: _____ Temperature: _____ Daylight Hours: _____</p>	<p>Phase of the Moon </p>
<p>How does sound travel from the source to the receiver?</p>	<p>Date: _____ Temperature: _____ Daylight Hours: _____</p>	<p>Phase of the Moon </p>