

What time is it?

Match these times to the clocks. Tell the time: "It is ___ o'clock," or "It is half past ___ o'clock."

1:00

3:30

7:30

9:30

6:00

5:00

8:00

12:30

2:00

4:00

1:30

11:30

12:00



8:30



3:00

10:00

6:30

2:30





Make your own clock

